

of harmonically related complex exponentials that share a common period with the signal being represented. In addition, we have seen that the Fourier series representation has a number of important properties which describe how different characteristics of signals are reflected in their Fourier series coefficients.

One of the most important properties of Fourier series is a direct consequence of the eigenfunction property of complex exponentials. Specifically, if a periodic signal is applied to an LTI system, then the output will be periodic with the same period, and each of the Fourier coefficients of the output is the corresponding Fourier coefficient of the input multiplied by a complex number whose value is a function of the frequency corresponding to that Fourier coefficient. This function of frequency is characteristic of the LTI system and is referred to as the frequency response of the system. By examining the frequency response, we were led directly to the idea of filtering of signals using LTI systems—a concept that has numerous applications, including several that we have described. One important class of applications involves the notion of frequency-selective filtering—i.e., the idea of using an LTI system to pass certain specified bands of frequencies and stop or significantly attenuate others. We introduced the concept of ideal frequency-selective filters and also gave several examples of frequency-selective filters described by linear constant-coefficient differential or difference equations.

The purpose of this chapter has been to begin the process of developing both the tools of Fourier analysis and an appreciation for the utility of these tools in applications. In the chapters that follow, we continue with this agenda by developing the Fourier transform representations for aperiodic signals in continuous and discrete time and by taking a deeper look not only at filtering, but also at other important applications of Fourier methods.

Chapter 3 Problems

The first section of problems belongs to the basic category and the answers are provided in the back of the book. The remaining three sections contain problems belonging to the basic, advanced, and extension categories, respectively.

BASIC PROBLEMS WITH ANSWERS

- 3.1. A continuous-time periodic signal $x(t)$ is real valued and has a fundamental period $T = 8$. The nonzero Fourier series coefficients for $x(t)$ are

$$a_1 = a_{-1} = 2, a_3 = a_{-3}^* = 4j.$$

Express $x(t)$ in the form

$$x(t) = \sum_{k=0}^{\infty} A_k \cos(\omega_k t + \phi_k).$$

- 3.2. A discrete-time periodic signal $x[n]$ is real valued and has a fundamental period $N = 5$. The nonzero Fourier series coefficients for $x[n]$ are

$$a_0 = 1, a_2 = a_{-2}^* = e^{j\pi/4}, a_4 = a_{-4}^* = 2e^{j\pi/3}.$$

Express $x[n]$ in the form

$$x[n] = A_0 + \sum_{k=1}^{\infty} A_k \sin(\omega_k n + \phi_k).$$

3.3. For the continuous-time periodic signal

$$x(t) = 2 + \cos\left(\frac{2\pi}{3}t\right) + 4 \sin\left(\frac{5\pi}{3}t\right),$$

determine the fundamental frequency ω_0 and the Fourier series coefficients a_k such that

$$x(t) = \sum_{k=-\infty}^{\infty} a_k e^{jk\omega_0 t}.$$

3.4. Use the Fourier series analysis equation (3.39) to calculate the coefficients a_k for the continuous-time periodic signal

$$x(t) = \begin{cases} 1.5, & 0 \leq t < 1 \\ -1.5, & 1 \leq t < 2 \end{cases}$$

with fundamental frequency $\omega_0 = \pi$.

3.5. Let $x_1(t)$ be a continuous-time periodic signal with fundamental frequency ω_1 and Fourier coefficients a_k . Given that

$$x_2(t) = x_1(1-t) + x_1(t-1),$$

how is the fundamental frequency ω_2 of $x_2(t)$ related to ω_1 ? Also, find a relationship between the Fourier series coefficients b_k of $x_2(t)$ and the coefficients a_k . You may use the properties listed in Table 3.1.

3.6. Consider three continuous-time periodic signals whose Fourier series representations are as follows:

$$x_1(t) = \sum_{k=0}^{100} \left(\frac{1}{2}\right)^k e^{jk\frac{2\pi}{30}t},$$

$$x_2(t) = \sum_{k=-100}^{100} \cos(k\pi) e^{jk\frac{2\pi}{30}t},$$

$$x_3(t) = \sum_{k=-100}^{100} j \sin\left(\frac{k\pi}{2}\right) e^{jk\frac{2\pi}{30}t}.$$

Use Fourier series properties to help answer the following questions:

- (a) Which of the three signals is/are real valued?
- (b) Which of the three signals is/are even?

3.7. Suppose the periodic signal $x(t)$ has fundamental period T and Fourier coefficients a_k . In a variety of situations, it is easier to calculate the Fourier series coefficients

b_k for $g(t) = dx(t)/dt$, as opposed to calculating a_k directly. Given that

$$\int_T^{2T} x(t) dt = 2,$$

find an expression for a_k in terms of b_k and T . You may use any of the properties listed in Table 3.1 to help find the expression.

3.8. Suppose we are given the following information about a signal $x(t)$:

1. $x(t)$ is real and odd.
2. $x(t)$ is periodic with period $T = 2$ and has Fourier coefficients a_k .
3. $a_k = 0$ for $|k| > 1$.
4. $\frac{1}{2} \int_0^2 |x(t)|^2 dt = 1$.

Specify two different signals that satisfy these conditions.

3.9. Use the analysis equation (3.95) to evaluate the numerical values of one period of the Fourier series coefficients of the periodic signal

$$x[n] = \sum_{m=-\infty}^{\infty} \{4\delta[n - 4m] + 8\delta[n - 1 - 4m]\}.$$

3.10. Let $x[n]$ be a real and odd periodic signal with period $N = 7$ and Fourier coefficients a_k . Given that

$$a_{15} = j, a_{16} = 2j, a_{17} = 3j,$$

determine the values of a_0, a_{-1}, a_{-2} , and a_{-3} .

3.11. Suppose we are given the following information about a signal $x[n]$:

1. $x[n]$ is a real and even signal.
2. $x[n]$ has period $N = 10$ and Fourier coefficients a_k .
3. $a_{11} = 5$.
4. $\frac{1}{10} \sum_{n=0}^9 |x[n]|^2 = 50$.

Show that $x[n] = A \cos(Bn + C)$, and specify numerical values for the constants A, B , and C .

3.12. Each of the two sequences $x_1[n]$ and $x_2[n]$ has a period $N = 4$, and the corresponding Fourier series coefficients are specified as

$$x_1[n] \longleftrightarrow a_k, \quad x_2[n] \longleftrightarrow b_k,$$

where

$$a_0 = a_3 = \frac{1}{2}a_1 = \frac{1}{2}a_2 = 1 \quad \text{and} \quad b_0 = b_1 = b_2 = b_3 = 1.$$

Using the multiplication property in Table 3.1, determine the Fourier series coefficients c_k for the signal $g[n] = x_1[n]x_2[n]$.

3.13. Consider a continuous-time LTI system whose frequency response is

$$H(j\omega) = \int_{-\infty}^{\infty} h(t)e^{-j\omega t} dt = \frac{\sin(4\omega)}{\omega}.$$

If the input to this system is a periodic signal

$$x(t) = \begin{cases} 1, & 0 \leq t < 4 \\ -1, & 4 \leq t < 8 \end{cases}$$

with period $T = 8$, determine the corresponding system output $y(t)$.

3.14. When the impulse train

$$x[n] = \sum_{k=-\infty}^{\infty} \delta[n - 4k]$$

is the input to a particular LTI system with frequency response $H(e^{j\omega})$, the output of the system is found to be

$$y[n] = \cos\left(\frac{5\pi}{2}n + \frac{\pi}{4}\right).$$

Determine the values of $H(e^{jk\pi/2})$ for $k = 0, 1, 2$, and 3 .

3.15. Consider a continuous-time ideal lowpass filter S whose frequency response is

$$H(j\omega) = \begin{cases} 1, & |\omega| \leq 100 \\ 0, & |\omega| > 100 \end{cases}$$

When the input to this filter is a signal $x(t)$ with fundamental period $T = \pi/6$ and Fourier series coefficients a_k , it is found that

$$x(t) \xrightarrow{S} y(t) = x(t).$$

For what values of k is it guaranteed that $a_k = 0$?

3.16. Determine the output of the filter shown in Figure P3.16 for the following periodic inputs:

- (a) $x_1[n] = (-1)^n$
- (b) $x_2[n] = 1 + \sin\left(\frac{3\pi}{8}n + \frac{\pi}{4}\right)$
- (c) $x_3[n] = \sum_{k=-\infty}^{\infty} \left(\frac{1}{2}\right)^{|n-4k|} u[n - 4k]$

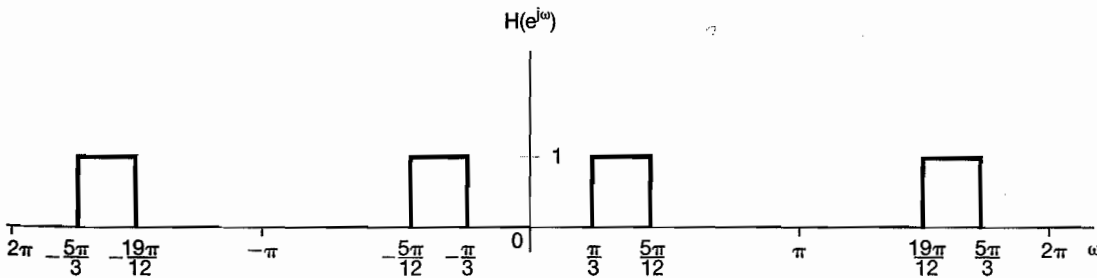


Figure P3.16

- 3.17. Consider three continuous-time systems S_1 , S_2 , and S_3 whose responses to a complex exponential input e^{j5t} are specified as

$$\begin{aligned} S_1 : e^{j5t} &\longrightarrow te^{j5t}, \\ S_2 : e^{j5t} &\longrightarrow e^{j5(t-1)}, \\ S_3 : e^{j5t} &\longrightarrow \cos(5t). \end{aligned}$$

For each system, determine whether the given information is sufficient to conclude that the system is definitely *not* LTI.

- 3.18. Consider three discrete-time systems S_1 , S_2 , and S_3 whose respective responses to a complex exponential input $e^{j\pi n/2}$ are specified as

$$\begin{aligned} S_1 : e^{j\pi n/2} &\longrightarrow e^{j\pi n/2} u[n], \\ S_2 : e^{j\pi n/2} &\longrightarrow e^{j3\pi n/2}, \\ S_3 : e^{j\pi n/2} &\longrightarrow 2e^{j5\pi n/2}. \end{aligned}$$

For each system, determine whether the given information is sufficient to conclude that the system is definitely *not* LTI.

- 3.19. Consider a causal LTI system implemented as the RL circuit shown in Figure P3.19. A current source produces an input current $x(t)$, and the system output is considered to be the current $y(t)$ flowing through the inductor.

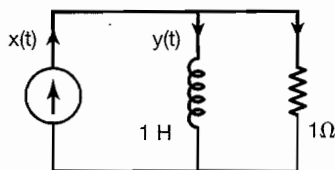


Figure P3.19

- Find the differential equation relating $x(t)$ and $y(t)$.
 - Determine the frequency response of this system by considering the output of the system to inputs of the form $x(t) = e^{j\omega t}$.
 - Determine the output $y(t)$ if $x(t) = \cos(t)$.
- 3.20. Consider a causal LTI system implemented as the RLC circuit shown in Figure P3.20. In this circuit, $x(t)$ is the input voltage. The voltage $y(t)$ across the capacitor is considered the system output.

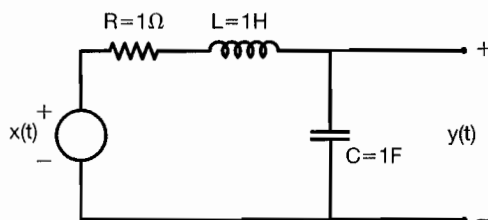


Figure P3.20

- (a) Find the differential equation relating $x(t)$ and $y(t)$.
- (b) Determine the frequency response of this system by considering the output of the system to inputs of the form $x(t) = e^{j\omega t}$.
- (c) Determine the output $y(t)$ if $x(t) = \sin(t)$.

BASIC PROBLEMS

3.21. A continuous-time periodic signal $x(t)$ is real valued and has a fundamental period $T = 8$. The nonzero Fourier series coefficients for $x(t)$ are specified as

$$a_1 = a_{-1}^* = j, a_5 = a_{-5} = 2.$$

Express $x(t)$ in the form

$$x(t) = \sum_{k=0}^{\infty} A_k \cos(\omega_k t + \phi_k).$$

3.22. Determine the Fourier series representations for the following signals:

- (a) Each $x(t)$ illustrated in Figure P3.22(a)–(f).
- (b) $x(t)$ periodic with period 2 and

$$x(t) = e^{-t} \quad \text{for} \quad -1 < t < 1$$

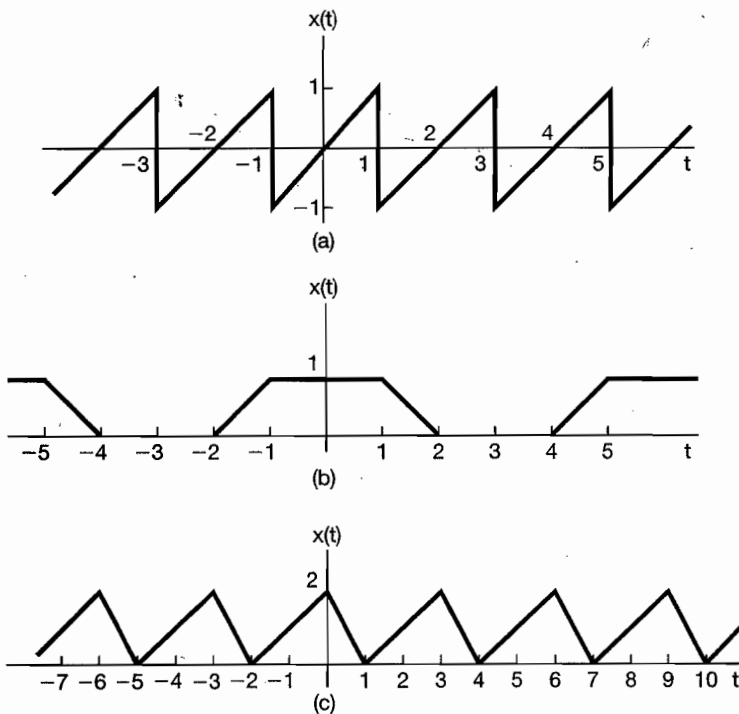


Figure P3.22

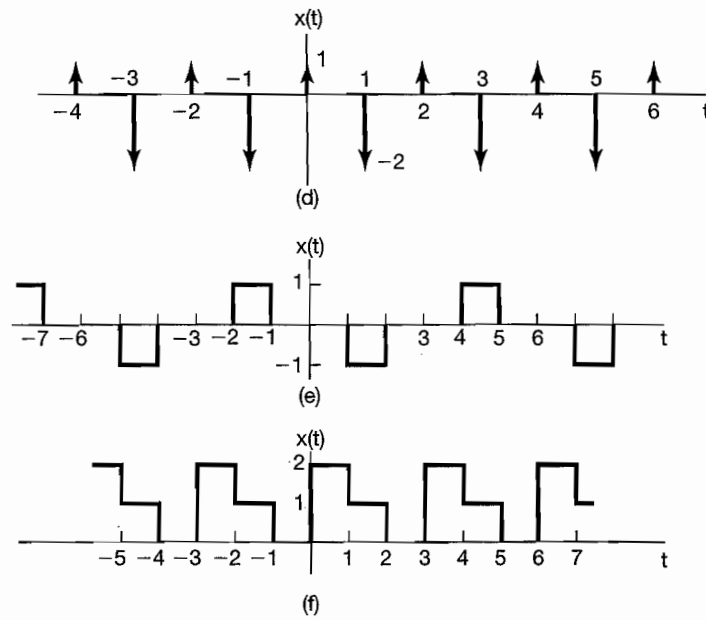


Figure P3.22 Continued

(c) $x(t)$ periodic with period 4 and

$$x(t) = \begin{cases} \sin \pi t, & 0 \leq t \leq 2 \\ 0, & 2 < t \leq 4 \end{cases}$$

3.23. In each of the following, we specify the Fourier series coefficients of a continuous-time signal that is periodic with period 4. Determine the signal $x(t)$ in each case.

(a) $a_k = \begin{cases} 0, & k = 0 \\ (j)^k \frac{\sin k\pi/4}{k\pi}, & \text{otherwise} \end{cases}$

(b) $a_k = (-1)^k \frac{\sin k\pi/8}{2k\pi}, \quad a_0 = \frac{1}{16}$

(c) $a_k = \begin{cases} jk, & |k| < 3 \\ 0, & \text{otherwise} \end{cases}$

(d) $a_k = \begin{cases} 1, & k \text{ even} \\ 2, & k \text{ odd} \end{cases}$

3.24. Let

$$x(t) = \begin{cases} t, & 0 \leq t \leq 1 \\ 2 - t, & 1 \leq t \leq 2 \end{cases}$$

be a periodic signal with fundamental period $T = 2$ and Fourier coefficients a_k .

(a) Determine the value of a_0 .

(b) Determine the Fourier series representation of $dx(t)/dt$.

(c) Use the result of part (b) and the differentiation property of the continuous-time Fourier series to help determine the Fourier series coefficients of $x(t)$.

- 3.25. Consider the following three continuous-time signals with a fundamental period of $T = 1/2$:

$$x(t) = \cos(4\pi t),$$

$$y(t) = \sin(4\pi t),$$

$$z(t) = x(t)y(t).$$

- (a) Determine the Fourier series coefficients of $x(t)$.
 (b) Determine the Fourier series coefficients of $y(t)$.
 (c) Use the results of parts (a) and (b), along with the multiplication property of the continuous-time Fourier series, to determine the Fourier series coefficients of $z(t) = x(t)y(t)$.
 (d) Determine the Fourier series coefficients of $z(t)$ through direct expansion of $z(t)$ in trigonometric form, and compare your result with that of part (c).
- 3.26. Let $x(t)$ be a periodic signal whose Fourier series coefficients are

$$a_k = \begin{cases} 2, & k = 0 \\ j(\frac{1}{2})^{|k|}, & \text{otherwise} \end{cases}$$

Use Fourier series properties to answer the following questions:

- (a) Is $x(t)$ real?
 (b) Is $x(t)$ even?
 (c) Is $dx(t)/dt$ even?
- 3.27. A discrete-time periodic signal $x[n]$ is real valued and has a fundamental period $N = 5$. The nonzero Fourier series coefficients for $x[n]$ are

$$a_0 = 2, a_2 = a_{-2}^* = 2e^{j\pi/6}, \quad a_4 = a_{-4}^* = e^{j\pi/3}.$$

Express $x[n]$ in the form

$$x[n] = A_0 + \sum_{k=1}^{\infty} A_k \sin(\omega_k n + \phi_k).$$

- 3.28. Determine the Fourier series coefficients for each of the following discrete-time periodic signals. Plot the magnitude and phase of each set of coefficients a_k .
- (a) Each $x[n]$ depicted in Figure P3.28(a)–(c)
 (b) $x[n] = \sin(2\pi n/3) \cos(\pi n/2)$
 (c) $x[n]$ periodic with period 4 and

$$x[n] = 1 - \sin \frac{\pi n}{4} \quad \text{for } 0 \leq n \leq 3$$

- (d) $x[n]$ periodic with period 12 and

$$x[n] = 1 - \sin \frac{\pi n}{4} \quad \text{for } 0 \leq n \leq 11$$

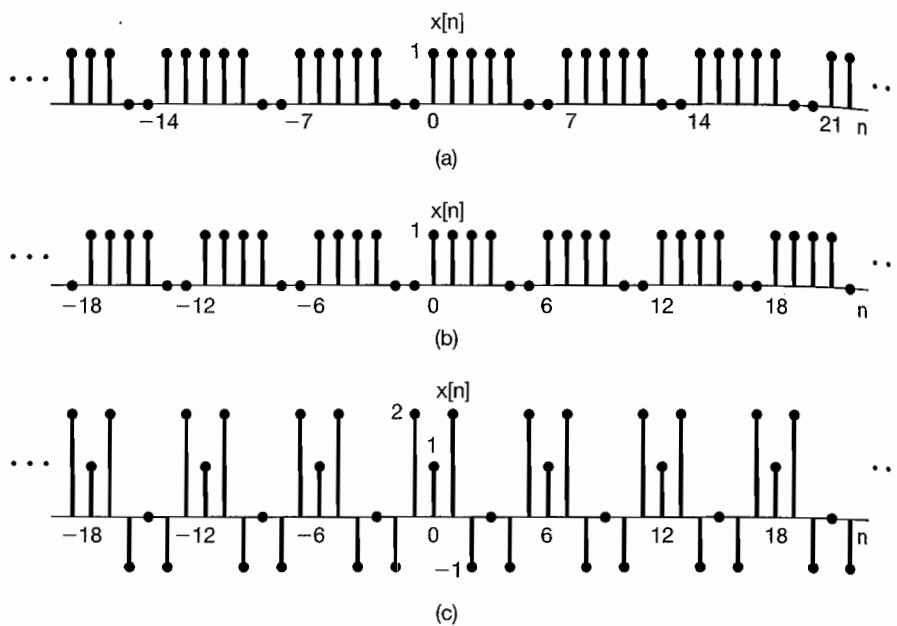


Figure P3.28

3.29. In each of the following, we specify the Fourier series coefficients of a signal that is periodic with period 8. Determine the signal $x[n]$ in each case.

- (a) $a_k = \cos\left(\frac{k\pi}{4}\right) + \sin\left(\frac{3k\pi}{4}\right)$ (b) $a_k = \begin{cases} \sin\left(\frac{k\pi}{3}\right), & 0 \leq k \leq 6 \\ 0, & k = 7 \end{cases}$
 (c) a_k as in Figure P3.29(a) (d) a_k as in Figure P3.29(b)

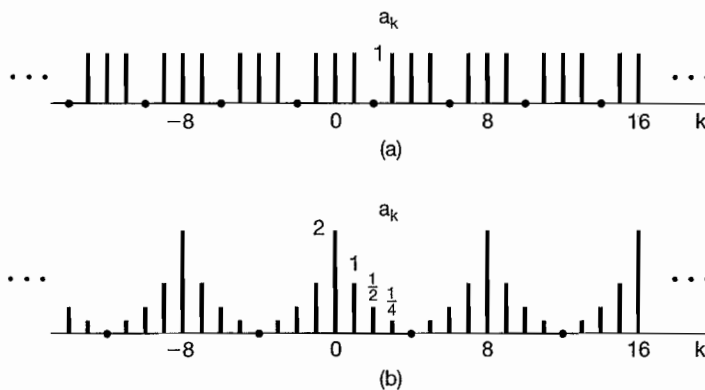


Figure P3.29

3.30. Consider the following three discrete-time signals with a fundamental period of 6:

$$x[n] = 1 + \cos\left(\frac{2\pi}{6}n\right), \quad y[n] = \sin\left(\frac{2\pi}{6}n + \frac{\pi}{4}\right), \quad z[n] = x[n]y[n].$$

- (a) Determine the Fourier series coefficients of $x[n]$.
- (b) Determine the Fourier series coefficients of $y[n]$.
- (c) Use the results of parts (a) and (b), along with the multiplication property of the discrete-time Fourier series, to determine the Fourier series coefficients of $z[n] = x[n]y[n]$.
- (d) Determine the Fourier series coefficients of $z[n]$ through direct evaluation, and compare your result with that of part (c).

3.31. Let

$$x[n] = \begin{cases} 1, & 0 \leq n \leq 7 \\ 0, & 8 \leq n \leq 9 \end{cases}$$

be a periodic signal with fundamental period $N = 10$ and Fourier series coefficients a_k . Also, let

$$g[n] = x[n] - x[n - 1].$$

- (a) Show that $g[n]$ has a fundamental period of 10.
 - (b) Determine the Fourier series coefficients of $g[n]$.
 - (c) Using the Fourier series coefficients of $g[n]$ and the First-Difference property in Table 3.2, determine a_k for $k \neq 0$.
- 3.32. Consider the signal $x[n]$ depicted in Figure P3.32. This signal is periodic with period $N = 4$. The signal can be expressed in terms of a discrete-time Fourier series as

$$x[n] = \sum_{k=0}^3 a_k e^{jk(2\pi/4)n}. \tag{P3.32-1}$$

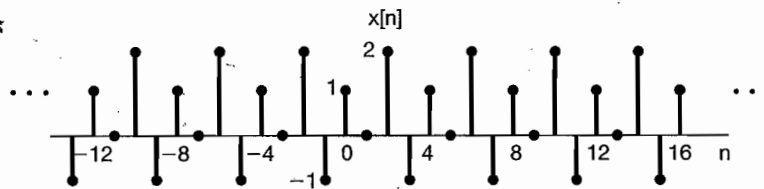


Figure P3.32

As mentioned in the text, one way to determine the Fourier series coefficients is to treat eq. (P3.32-1) as a set of four linear equations (for $n = 0, 1, 2, 3$) in four unknowns ($a_0, a_1, a_2,$ and a_3).

- (a) Write out these four equations explicitly, and solve them directly using any standard technique for solving four equations in four unknowns. (Be sure first to reduce the foregoing complex exponentials to the simplest form.)
- (b) Check your answer by calculating the a_k directly, using the discrete-time Fourier series analysis equation

$$a_k = \frac{1}{4} \sum_{n=0}^3 x[n] e^{-jk(2\pi/4)n}.$$

- 3.33. Consider a causal continuous-time LTI system whose input $x(t)$ and output $y(t)$ are related by the following differential equation:

$$\frac{d}{dt}y(t) + 4y(t) = x(t).$$

Find the Fourier series representation of the output $y(t)$ for each of the following inputs:

- (a) $x(t) = \cos 2\pi t$
 (b) $x(t) = \sin 4\pi t + \cos(6\pi t + \pi/4)$

- 3.34. Consider a continuous-time LTI system with impulse response

$$h(t) = e^{-4|t|}.$$

Find the Fourier series representation of the output $y(t)$ for each of the following inputs:

- (a) $x(t) = \sum_{n=-\infty}^{+\infty} \delta(t - n)$
 (b) $x(t) = \sum_{n=-\infty}^{+\infty} (-1)^n \delta(t - n)$
 (c) $x(t)$ is the periodic wave depicted in Figure P3.34.

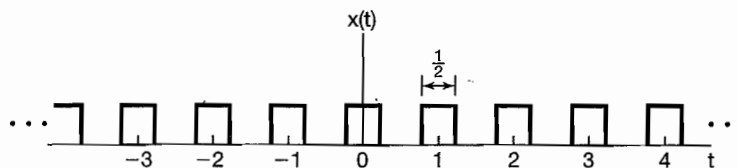


Figure P3.34

- 3.35. Consider a continuous-time LTI system S whose frequency response is

$$H(j\omega) = \begin{cases} 1, & |\omega| \geq 250 \\ 0, & \text{otherwise} \end{cases}$$

When the input to this system is a signal $x(t)$ with fundamental period $T = \pi/7$ and Fourier series coefficients a_k , it is found that the output $y(t)$ is identical to $x(t)$. For what values of k is it guaranteed that $a_k = 0$?

- 3.36. Consider a causal discrete-time LTI system whose input $x[n]$ and output $y[n]$ are related by the following difference equation:

$$y[n] - \frac{1}{4}y[n-1] = x[n]$$

Find the Fourier series representation of the output $y[n]$ for each of the following inputs:

- (a) $x[n] = \sin(\frac{3\pi}{4}n)$
 (b) $x[n] = \cos(\frac{\pi}{4}n) + 2\cos(\frac{\pi}{2}n)$

- 3.37. Consider a discrete-time LTI system with impulse response

$$h[n] = \left(\frac{1}{2}\right)^{|n|}.$$

Find the Fourier series representation of the output $y[n]$ for each of the following inputs:

- (a) $x[n] = \sum_{k=-\infty}^{\infty} \delta[n - 4k]$
 (b) $x[n]$ is periodic with period 6 and

$$x[n] = \begin{cases} 1, & n = 0, \pm 1 \\ 0, & n = \pm 2, \pm 3 \end{cases}$$

- 3.38. Consider a discrete-time LTI system with impulse response

$$h[n] = \begin{cases} 1, & 0 \leq n \leq 2 \\ -1, & -2 \leq n \leq -1 \\ 0, & \text{otherwise} \end{cases}$$

Given that the input to this system is

$$x[n] = \sum_{k=-\infty}^{+\infty} \delta[n - 4k],$$

determine the Fourier series coefficients of the output $y[n]$.

- 3.39. Consider a discrete-time LTI system S whose frequency response is

$$H(e^{j\omega}) = \begin{cases} 1, & |\omega| \leq \frac{\pi}{8} \\ 0, & \frac{\pi}{8} < |\omega| < \pi \end{cases}$$

Show that if the input $x[n]$ to this system has a period $N = 3$, the output $y[n]$ has only one nonzero Fourier series coefficient per period.

ADVANCED PROBLEMS

- 3.40. Let $x(t)$ be a periodic signal with fundamental period T and Fourier series coefficients a_k . Derive the Fourier series coefficients of each of the following signals in terms of a_k :

- (a) $x(t - t_0) + x(t + t_0)$
 (b) $\mathcal{E}\{x(t)\}$
 (c) $\mathcal{R}\{x(t)\}$
 (d) $\frac{d^2 x(t)}{dt^2}$
 (e) $x(3t - 1)$ [for this part, first determine the period of $x(3t - 1)$]

- 3.41. Suppose we are given the following information about a continuous-time periodic signal with period 3 and Fourier coefficients a_k :

1. $a_k = a_{k+2}$.
2. $a_k = a_{-k}$.
3. $\int_{-0.5}^{0.5} x(t) dt = 1$.
4. $\int_{0.5}^{1.5} x(t) dt = 2$.

Determine $x(t)$.

- 3.42.** Let $x(t)$ be a real-valued signal with fundamental period T and Fourier series coefficients a_k .
- Show that $a_k = a_{-k}^*$ and a_0 must be real.
 - Show that if $x(t)$ is even, then its Fourier series coefficients must be real and even.
 - Show that if $x(t)$ is odd, then its Fourier series coefficients are imaginary and odd and $a_0 = 0$.
 - Show that the Fourier coefficients of the even part of $x(t)$ are equal to $\Re\{a_k\}$.
 - Show that the Fourier coefficients of the odd part of $x(t)$ are equal to $j\Im\{a_k\}$.
- 3.43. (a)** A continuous-time periodic signal $x(t)$ with period T is said to be *odd harmonic* if, in its Fourier series representation

$$x(t) = \sum_{k=-\infty}^{+\infty} a_k e^{jk(2\pi/T)t}, \quad (\text{P3.43-1})$$

$a_k = 0$ for every non-zero even integer k .

- (i) Show that if $x(t)$ is odd harmonic, then

$$x(t) = -x\left(t + \frac{T}{2}\right). \quad (\text{P3.43-2})$$

(ii) Show that if $x(t)$ satisfies eq. (P3.43-2), then it is odd harmonic.

- (b) Suppose that $x(t)$ is an odd-harmonic periodic signal with period 2 such that

$$x(t) = t \quad \text{for } 0 < t < 1.$$

Sketch $x(t)$ and find its Fourier series coefficients.

- (c) Analogously, to an odd-harmonic signal, we could define an even-harmonic signal as a signal for which $a_k = 0$ for k odd in the representation in eq. (P3.43-1). Could T be the fundamental period for such a signal? Explain your answer.
- (d) More generally, show that T is the fundamental period of $x(t)$ in eq. (P3.43-1) if one of two things happens:
- Either a_1 or a_{-1} is nonzero;
 - There are two integers k and l that have no common factors and are such that both a_k and a_l are nonzero.

- 3.44.** Suppose we are given the following information about a signal $x(t)$:

- $x(t)$ is a real signal.
- $x(t)$ is periodic with period $T = 6$ and has Fourier coefficients a_k .
- $a_k = 0$ for $k = 0$ and $k > 2$.
- $x(t) = -x(t - 3)$.
- $\frac{1}{6} \int_{-3}^3 |x(t)|^2 dt = \frac{1}{2}$.
- a_1 is a positive real number.

Show that $x(t) = A \cos(Bt + C)$, and determine the values of the constants A , B , and C .

3.45. Let $x(t)$ be a real periodic signal with Fourier series representation given in the sine-cosine form of eq. (3.32); i.e.,

$$x(t) = a_0 + 2 \sum_{k=1}^{\infty} [B_k \cos k\omega_0 t - C_k \sin k\omega_0 t]. \quad (\text{P3.45-1})$$

- (a) Find the exponential Fourier series representation of the even and odd parts of $x(t)$; that is, find the coefficients α_k and β_k in terms of the coefficients in eq. (P3.45-1) so that

$$\mathcal{E}v\{x(t)\} = \sum_{k=-\infty}^{+\infty} \alpha_k e^{jk\omega_0 t},$$

$$\mathcal{O}d\{x(t)\} = \sum_{k=-\infty}^{+\infty} \beta_k e^{jk\omega_0 t}.$$

- (b) What is the relationship between α_k and α_{-k} in part (a)? What is the relationship between β_k and β_{-k} ?
 (c) Suppose that the signals $x(t)$ and $z(t)$ shown in Figure P3.45 have the sine-cosine series representations

$$x(t) = a_0 + 2 \sum_{k=1}^{\infty} \left[B_k \cos \left(\frac{2\pi kt}{3} \right) - C_k \sin \left(\frac{2\pi kt}{3} \right) \right],$$

$$z(t) = d_0 + 2 \sum_{k=1}^{\infty} \left[E_k \cos \left(\frac{2\pi kt}{3} \right) - F_k \sin \left(\frac{2\pi kt}{3} \right) \right].$$

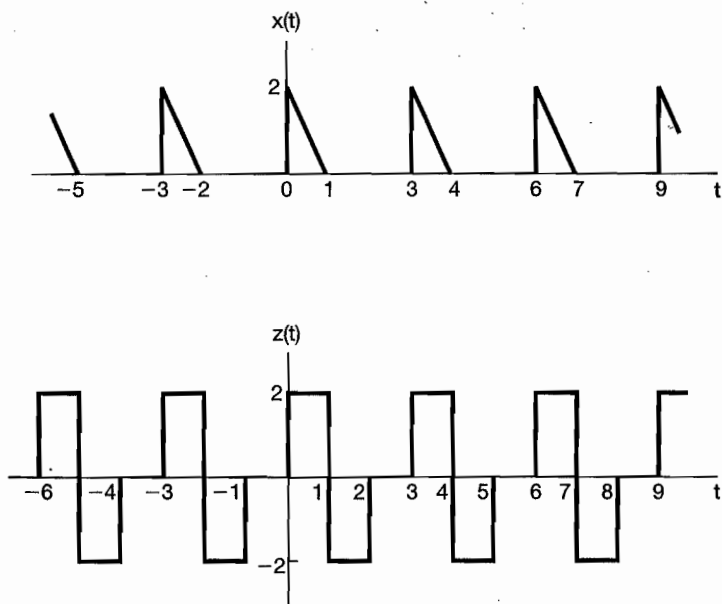


Figure P3.45