

1.6 (a) Assume $x_a(t) = A \cdot \cos(2\pi F_0 t + \theta)$. Then

$$x(n) = A \cdot \cos(2\pi F_0 n T + \theta)$$

$$= A \cos\left(2\pi n \frac{T}{T_p} + \theta\right)$$

For periodicity, we require $x(n) = x(n+N)$

where N is the fundamental period of $x(n)$.

(N : integer)

$$\text{i.e. } A \cos\left(2\pi n \frac{T}{T_p} + \theta\right) = A \cos\left(2\pi (n+N) \frac{T}{T_p} + \theta\right)$$

This is true iff there exists an integer k such that

$$2\pi N \frac{T}{T_p} = 2\pi k$$

i.e.

$$\boxed{\frac{T}{T_p} = \frac{k}{N}}$$

(b) Fundamental period of $x(n)$ in seconds

$$\rightarrow N \cdot T$$

(c) From (a). $N \cdot T = k \cdot T_p$.

i.e. fundamental period of $x(n)$, in seconds,

is equal to an integer number of periods of $x_a(t)$.

1.7. (a) ≥ 20 kHz

(b) Aliasing. Generating frequency $F_1' = -3$ kHz

(c) Aliasing. Generating frequency $F_2' = 1$ kHz

1.8. (a) 200 Hz

(b) 125 Hz

1.9 (a) $F_1 = 240$ Hz $F_2 = 360$ Hz

$$\therefore F_N = 2 \cdot F_{\max} = 720 \text{ Hz}$$

②

(b) $F_s = 600 \text{ Hz}$. Folding frequency $= \frac{F_s}{2} = 300 \text{ Hz}$.

(c) $x(n) = x_c(nT) = x_c\left(\frac{n}{F_s}\right) = \sin 2\pi \cdot \left(\frac{2}{5}\right) n + 3 \sin 2\pi \cdot \left(\frac{3}{5}\right) n$
 $= \sin 2\pi \cdot \left(\frac{2}{5}\right) n + 3 \cdot \sin \frac{3}{2} 2\pi \left(-\frac{2}{5}\right) n$
 $= -2 \sin 2\pi \left(\frac{2}{5}\right) n$

\therefore Frequency of $x(n) = \frac{2}{5} \cdot 2\pi = \frac{4\pi}{5}$ (radians/sample)

(d) $y_a(t) = -2 \sin 2\pi \cdot \frac{2}{5} \cdot 600t = -2 \sin 480\pi t$

1.11 $x_a(t) = 3 \cos 100\pi t + 2 \sin 250\pi t$

$F_s = 1/T = 200$ samples/s.

$\therefore x(n) = 3 \cos\left(\frac{100\pi}{200} n\right) + 2 \sin\left(\frac{250\pi}{200} n\right) = 3 \cos 2\pi \left(\frac{1}{4}\right) n + 2 \sin 2\pi \left(\frac{5}{8}\right) n$
 $= 3 \cos 2\pi \cdot \left(\frac{1}{4}\right) n - 2 \sin 2\pi \left(\frac{3}{8}\right) n$

$F'_s = 1/T' = 1000$ samples/s.

$\therefore y_a(t) = 3 \cos 2\pi \cdot \left(\frac{1}{4}\right) \cdot 1000t - 2 \sin 2\pi \cdot \left(\frac{3}{8}\right) \cdot 1000t$
 $= 3 \cos 500\pi t - 2 \sin 750\pi t$

2.10 H time invariant.

$$x_1(n) = \{ \underset{\uparrow}{1}, 0, 2 \} \xrightarrow{H} y_1(n) = \{ \underset{\uparrow}{0}, 1, 2 \}$$

$$x_2(n) = \{ \underset{\uparrow}{0}, 0, 3 \} \xrightarrow{H} y_2(n) = \{ \underset{\uparrow}{0}, 1, 0, 2 \}$$

$$x_3(n) = \{ \underset{\uparrow}{0}, 0, 0 \} \rightarrow y_3(n) = \{ \underset{\uparrow}{1}, 2, 1 \}$$

Is H linear?

$$h(n) = H[\delta(n)] = H[x_3(n+3)] = y_3(n+3) = \{ \overline{1, 2, 1, 0} \}$$

$$x_2(n) = 3\delta(n-2) \Rightarrow y_2(n) \stackrel{?}{=} 3h(n-2)$$

$$3h(n-2) = 3\{ \underset{\uparrow}{1}, 2, 1 \} = \{ \underset{\uparrow}{3}, 6, 3 \} \neq y_2(n)$$

$\therefore H$ is not linear.

2.11 H linear.

$$x_1(n) = \{ \underset{\uparrow}{-1}, 2, 1 \} \xrightarrow{H} y_1(n) = \{ \underset{\uparrow}{1}, 2, -1, 0, 1 \}$$

$$x_2(n) = \{ \underset{\uparrow}{1}, -1, -1 \} \xrightarrow{H} y_2(n) = \{ \underset{\uparrow}{-1}, 1, 0, 2 \}$$

$$x_3(n) = \{ \underset{\uparrow}{0}, 1, 1 \} \xrightarrow{H} y_3(n) = \{ \underset{\uparrow}{1}, 2, 1 \}$$

Is H time invariant?

$$x_4(n) = x_1(n) + x_2(n) = \{ \underset{\uparrow}{0}, 1, 0 \} \quad y_4(n) = y_1(n) + y_2(n) = \{ \underset{\uparrow}{0}, 3, -1, 2, 1 \}$$

$$x_5(n) = x_2(n) + x_3(n) = \{ \underset{\uparrow}{1}, 0, 0 \} \quad y_5(n) = y_2(n) + y_3(n) = \{ \underset{\uparrow}{-1}, 2, 2, 3 \}$$

$$x_4(n) = x_5(n-1) \quad \text{But } y_4(n) \neq y_5(n-1)$$

$\therefore H$ is not time invariant.

2.13. Prove: A relaxed LTI system is BIBO stable iff

$$\sum_{k=-\infty}^{\infty} |h(k)| \leq M_h < \infty$$

for some constant M_h .

proof: (if part)

Assume $\sum_{k=-\infty}^{\infty} |h(k)| \leq M_h < \infty$ and prove that if $|x(n)| < M_i \forall n$, then

$$|y(n)| < M_o \forall n.$$

$$|y(n)| < \left| \sum_{k=-\infty}^{\infty} x(n-k)h(k) \right|$$

$$\leq \sum_{k=-\infty}^{\infty} |x(n-k)h(k)| \quad (\text{Triangle Inequality})$$

$$= \sum_{k=-\infty}^{\infty} |x(n-k)| \cdot |h(k)|$$

$$\leq \sum_{k=-\infty}^{\infty} M_i \cdot |h(k)| \leq M_i \cdot M_h = M_o \quad \forall n \quad \text{iff} \quad \sum_{k=-\infty}^{\infty} |h(k)| \leq M_h$$

$$\Rightarrow |y(n)| \leq M_o \quad \forall n.$$

(Only if part)

Now show that a bounded input may give rise to an unbounded output if $\sum_{k=-\infty}^{\infty} |h(k)| = \infty$.

$$\text{Consider } x(n) = \begin{cases} \frac{h^*(-n)}{|h(-n)|} & \text{for } h(-n) \neq 0 \\ 0 & \text{for } h(-n) = 0 \end{cases}$$

$$\text{Note: } |x(n)| = \begin{cases} 1 & h(-n) \neq 0 \\ 0 & h(-n) = 0 \end{cases}$$

Thus, this input is bounded. $\forall n$.

(5)

$$\Rightarrow y(n) = \sum_{k=-\infty}^{\infty} x(n-k) h(k) = \sum_{k=-\infty}^{\infty} \frac{h^*(k) h(k)}{|h(k)|} = \sum_{k=-\infty}^{\infty} |h(k)| = \infty$$

Thus, a bounded input gives rise to an unbounded output if $\sum_{k=-\infty}^{\infty} |h(k)| = \infty$. Therefore, for a system to be BIBO stable, it is necessary that $\sum_{k=-\infty}^{\infty} |h(k)| < \infty$.

2.45. $y(n) = ay(n-1) + bx(n)$

(a) Assume system is relaxed, i.e. $h(n) = 0, \forall n < 0$.

$$h(n) = y_{zs}(n) \Big|_{x(n) = \delta(n)}$$

$$\therefore h(0) = ah(-1) + b\delta(0) = b$$

$$h(1) = ah(0) + b\delta(1) = ab$$

\vdots

$$h(n) = a^n b u(n)$$

$$\sum_{n=-\infty}^{\infty} h(n) = \sum_{n=0}^{\infty} a^n b = \frac{b}{1-a} \quad (a < 1)$$

$$\frac{b}{1-a} = 1 \Rightarrow b = 1-a$$

(b) $S(n) = y_{zs}(n) \Big|_{x(n) = u(n)}$

$$S(0) = aS(-1) + bu(0) = b$$

$$S(1) = aS(0) + bu(1) = ab + b$$

$$S(2) = a^2b + ab + b$$

\vdots

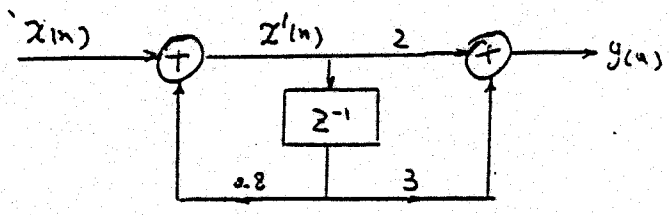
$$S(n) = \sum_{k=0}^n b a^k = b \cdot \frac{1-a^{n+1}}{1-a} u(n)$$

(for $|a| < 1$)

$$S(\infty) = \frac{b}{1-a} = 1 \Rightarrow b = 1-a$$

$$\textcircled{c} S(\infty) = \sum_{h=-\infty}^{\infty} h(n) = \frac{b}{1-a}$$

2.46



$$\textcircled{c} \begin{aligned} x'[n] &= x[n] + 0.8 x'[n-1] \\ y[n] &= 2x'[n] + 3x'[n-1] \end{aligned}$$

Let $g[n] = x'[n] \mid x[n] = \delta[n]$ then

$$g[0] = \delta[0] + 0.8 x'[-1] = 1 + 0 = 1$$

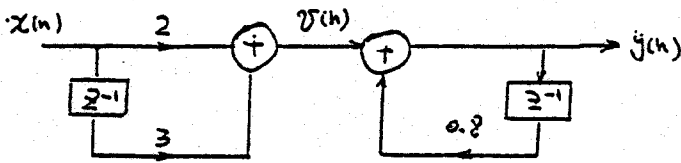
$$g[1] = 0.8 g[0] = 0.8$$

$$\vdots$$

$$g[n] = (0.8)^n u[n]$$

$$\begin{aligned} \therefore h[n] &= 2g[n] + 3g[n-1] = 2(0.8)^n u[n] + 3 \cdot (0.8)^{n-1} u[n-1] \\ &= 2(0.8)^0 \delta[n] + 2(0.8)^n u[n-1] + \frac{3}{0.8} (0.8)^n u[n-1] \\ &= 2\delta[n] + 5.75 (0.8)^n u[n-1] \\ &= 2\delta[n] + 4.6 (0.8)^{n-1} u[n-1] \end{aligned}$$

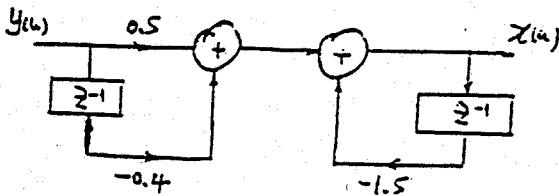
⑤ The direct Form I Realization for this system is:



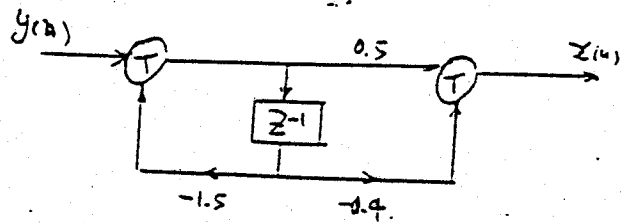
$$y(n) = v(n) + 0.8 y(n-1) \Rightarrow v(n) = y(n) - 0.8 y(n-1)$$

$$v(n) = 2x(n) + 3x(n-1) \Rightarrow x(n) = \frac{1}{2}v(n) - 1.5x(n-1)$$

$$= \frac{1}{2}y(n) - 0.4y(n-1) - 1.5x(n-1)$$



Direct Form I



Direct Form II

2.6i $x(n) = S(n) + r_1 S(n-k_1) + r_2 S(n-k_2)$

④ $R_{xx}(l) = \sum_{n=-\infty}^{\infty} x(n) x(n-l)$

$$= \sum_{n=-\infty}^{\infty} [S(n) + r_1 S(n-k_1) + r_2 S(n-k_2)] [S(n-l) + r_1 S(n-l-k_1) + r_2 S(n-l-k_2)]$$

$$= r_{ss}(l) + r_1 r_{ss}(l+k_1) + r_2 r_{ss}(l+k_2)$$

$$+ r_1 r_{ss}(l-k_1) + r_1^2 r_{ss}(l) + r_1 r_2 r_{ss}(l-k_1+k_2)$$

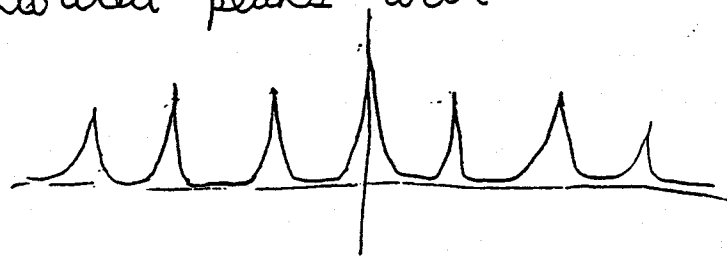
$$+ r_2 r_{ss}(l-k_2) + r_1 r_2 r_{ss}(l+k_1-k_2) + r_2^2 r_{ss}(l)$$

b) If $r_{ss}(l)$ has a sharp peak at $l=0$. $r_{ss}(l-k)$ will have a sharp peak at $l=k$.

In our case $r_{xx}(l)$ will have peaks at $l=0, \pm k_1, \pm k_2, \pm |k_2 - k_1|$

We have 7 symmetrically distributed peaks with the largest at $l=0$

Envelope $|r_{xx}(l)|$ looks like



↳ If we assume that k_2 is the larger lag value of the components of $x(n)$ we can find k_2 (corresponding to outermost peaks) as

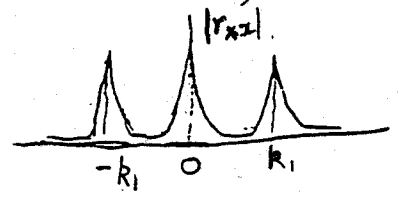
$$|k_2 - k_1| < |k_2| \quad \text{and} \quad |k_1| < |k_2|$$

Separating and identifying the peaks corresponding to k_1 and $k_2 - k_1$ though is impossible, as the middle two peaks between $l=0$ and $l=\pm k_2$, could correspond to either. Hence determining k_2 is possible but determining k_1 is impossible

c) If $r_2 = 0$ we get

$$r_{xx}(l) = (1 + r_1^2) r_{ss}(l) + r_1 r_{ss}(l + k_1) + r_1 r_{ss}(l - k_1)$$

Here k_1 can be determined exactly



Ratio of peaks at $0 \leq k_1$

$$\frac{\text{Peak at } 0}{\text{Peak at } k_1} = \frac{1 + r_1^2}{r_1}$$

Solve above quadratic equation and take positive value for r_1